

Name: \_\_\_\_\_

Instructor: \_\_\_\_\_

Time of your class: \_\_\_\_\_

UMKC Department of Mathematics and Statistics

**Math 210 CALCULUS I**  
**Common Final Examination**

INSTRUCTIONS:

1. Write your name, the name of your instructor and the time your class meets on top.
2. Only scientific calculators with no integration capabilities may be used for this examination. Graphing calculators and electronic communication devices are NOT permitted in the room.
3. Make sure that your test contains all problems indicated below on this cover page.
4. On page 1 ONLY: Multiple choice problems; full credit will be given for a correct answer and no credit for an incorrect answer; no work needs to be shown.
5. On all other pages: **All work MUST be shown to receive full credit.**
6. Unless specifically asked not to simplify, all answers need to be simplified completely.
7. EXACT answers are expected, NO approximations (unless otherwise specified).
8. Write your final answer in the box provided.

Problem	Possible	Earned
1	20	
2	6	
3	6	
4	8	
5	18	
6	10	
7	10	
8	9	
9	5	
10	7	
11	9	
12	9	
13	10	
14	10	
15	10	
16	8	
17	10	
18	10	
19	9	
20	10	
21	6	
Total	200	

1. (20 pts) Determine the following limits. Choose “DNE” (Does Not Exist) as your answer only if your function has NO limit, finite or infinite. **Circle one of the indicated choices.** No work needs to be shown.

(a) (5 pts)  $\lim_{x \rightarrow \infty} \frac{x^2 + 2x}{3x^2 + 4} =$

- A. DNE
- B. 1
- C.  $\frac{3}{7}$
- D.  $\frac{1}{3}$
- E.  $\frac{1}{4}$
- F.  $\infty$

(b) (5 pts)  $\lim_{x \rightarrow -2} \frac{3x}{(x+2)^2} =$

- A. 3
- B.  $-\frac{3}{2}$
- C. DNE
- D. -6
- E.  $\infty$
- F.  $-\infty$

(c) (5 pts)  $\lim_{x \rightarrow \infty} e^{-x} =$

- A. 0
- B. 1
- C. -1
- D.  $e$
- E.  $\infty$
- F.  $-\infty$

(d) (5 pts)  $\lim_{x \rightarrow 1} \frac{x^2 - 1}{x^2 - x} =$

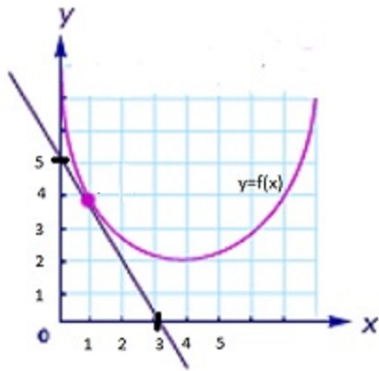
- A. DNE
- B. 0
- C. 1
- D. 1.5
- E. 2
- F.  $\infty$

2. (6 pts) Find the value of the constant  $k$  that makes the function  $f(x)$  continuous everywhere.

$$f(x) = \begin{cases} -3x^2 + k & \text{for } x \leq -1 \\ 5x + 6 & \text{for } x > -1 \end{cases}$$

$k =$
-------

3. (6 pts) The parabola in the picture below is the graph of a function  $f(x)$ , and the line in the picture is the line tangent to the graph  $y = f(x)$  at the point with  $x = 1$ . Find the value of  $f'(1)$ .



$f'(1) =$
-----------

4. (8 pts) Use the limit DEFINITION of the derivative to show that the derivative of the function  $f(x) = 3 - 2x^2$  is  $f'(x) = -4x$ .

5. Compute the derivatives of the following functions; do not simplify the answer.

(a) (6 pts)  $f(x) = \sin^2(3x)$

$$f'(x) =$$

(b) (6 pts)  $g(x) = (1 + 3x^2)e^{5x}$

$$g'(x) =$$

(c) (6 pts)  $h(x) = \sqrt{1 + \tan x}$

$$h'(x) =$$

6. (10 pts) Let  $f(x) = \frac{x-1}{x+1}$ . Compute  $f'(2)$  and  $f''(2)$ .

$$f'(2) =$$

$$f''(2) =$$

7. (10 pts) Find the derivative  $\frac{dy}{dx}$  at the point with  $x = -2$  and  $y = 1$ , given that

$$xy^2 - x^2 + y + 5 = 0$$

$$\left. \frac{dy}{dx} \right|_{(x,y)=(-2,1)} =$$

8. (9 pts) Find the limit and provide a complete justification:

$$\lim_{x \rightarrow 0} \frac{e^{3x} + x - 1}{\sin(x)} =$$



9. (5 pts) Let  $f(x)$  be a function such that  $f(1) = 5$  and  $f'(1) = 3$ . Use local linear approximation to find the approximate value of  $f(1.2)$ .

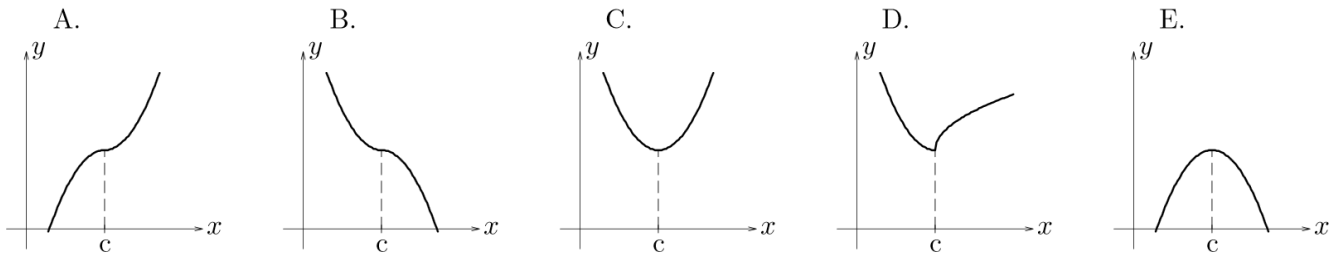
$$f(1.2) \simeq$$

(The symbol  $\simeq$  means "approximately equal to")

10. (7 pts) Suppose that a function has all of the following properties:

- (a)  $f''(x) > 0$  for  $x < c$ ;
- (b)  $f'(c) = 0$
- (c)  $f'(x) < 0$  for  $x > c$ .

Which of the following could be the graph of  $f$ ? (Circle the correct answer.)



11. (9 pts) Find the absolute minimum value of  $f(x) = 3x^3 - x$  on the interval  $\left[-\frac{1}{\sqrt{3}}, \frac{1}{\sqrt{3}}\right]$ ; indicate the value of  $x$  where the minimum is achieved.

minimum value= <span style="margin-left: 150px;">at x =</span>
--

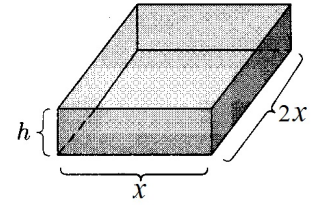
12. (9 pts) Consider the function  $f(x) = \ln(x^2 + 2x + 5)$ . Find the open intervals on which  $f$  is strictly increasing.

strictly increasing on:

13. (10 pts) Given the function  $f(x) = 4x^5 - 5x^4$ , find the open intervals on which  $f$  is concave up.

concave up on:

14. (10 pts) A rectangular cardboard box with NO top has a rectangular base, so that one side of the base is twice as long as the other. If the box is to have a volume of  $\frac{4}{3} \text{ m}^3$ , what should the height of the box be in order to *minimize* the amount of cardboard used?



height =

15. (10 pts) A spherical balloon is inflated at a rate of 8 cubic centimeters per second. Find the rate at which the radius is increasing at the time when the radius is 5 centimeters.  
(The volume of a sphere is  $V = \frac{4}{3}\pi r^3$ .)

rate=



16. (8 pts) A particle moves along an s-axis. Use the given information to find the position function  $s(t)$  of the particle, as a function of  $t$ .

$$v(t) = 2t - 3 \quad s(1) = 3$$

$s(t) =$

17. (10 pts) Evaluate the indefinite integral  $\int \left( \pi - \frac{4}{x^3} + \frac{1}{\sqrt{x}} \right) dx$ . Simplify the answer.

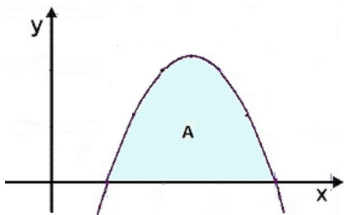
- 
18. (10 pts) Evaluate the indefinite integral  $I = \int \frac{e^x}{1 + e^x} dx$  using a  $u$ -substitution; show all work.

$I =$

19. (9 pts) Evaluate the definite integral  $I = \int_0^{\frac{1}{6}} 4 \cos(\pi x) dx$ .

$I =$

20. (10 pts) Find the area  $A$  between the parabola  $y = -x^2 + 5x - 4$  and the  $x$ -axis.



AREA =

21. (6 pts) If  $\int_0^5 f(x) dx = 10$  and  $\int_{-1}^0 f(x) dx = -7$ , compute  $I = \int_{-1}^5 f(x) dx$ .

$I =$